


Die MENGE der Zahl sechs

Überlege dir zu jeder Blume eine Aufgabe!




$$\boxed{4} + \boxed{2} = \boxed{6}$$



$$\boxed{5} + \boxed{1} = \boxed{6}$$




$$\boxed{6} + \boxed{0} = \boxed{6}$$




$$\boxed{6} - \boxed{4} = \boxed{2}$$

$$\boxed{6} - \boxed{1} = \boxed{5}$$



$$\boxed{6} - \boxed{5} = \boxed{1}$$



$$\boxed{6} - \boxed{2} = \boxed{4}$$

$$\boxed{3} + \boxed{3} = \boxed{6}$$



$$\boxed{2} + \boxed{4} = \boxed{6}$$