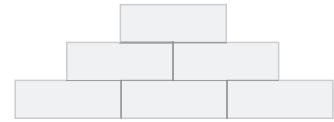







Steine ergänzen






Erkennst du, wie viele Steine in den Mauern fehlen?



	1	2			3		
	4			5	6		
		7			8		
		9	10			11	
	12	13	14	15	16	17	
	18	19	20	21			
	22	23			24		
	25	26			27	28	
		29		30	31		
	32	33	34	35			
36	37						




	1	2	3		4	5	
	6			7		8	
	9			10	11	12	
	13	14	15	16	17		
	18	19		20	21		
		22		23	24		
	25	26	27	28	29		
	30	31	32	33	34		
	35	36	37			38	
		39	40	41	42		
	43	44	45		46		

