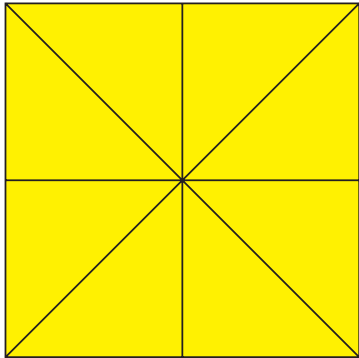




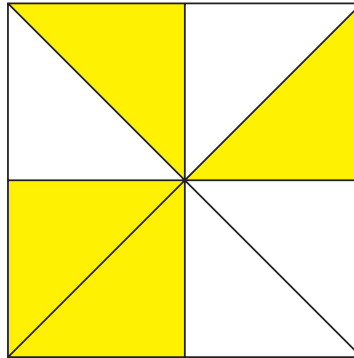
BRÜCHE GEOMETRISCH DARGESTELLT



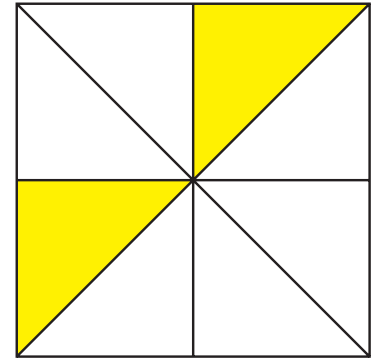
- 1 Schreibe die folgenden Darstellungen als Bruch und als Wort darunter! Wenn möglich, kürze den Bruch!



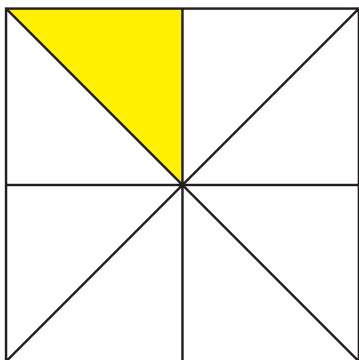
$$\frac{1}{1} \quad \text{ein Ganzes}$$



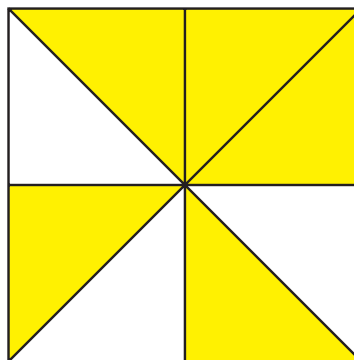
$$\frac{1}{2} \quad \text{ein Halb}$$



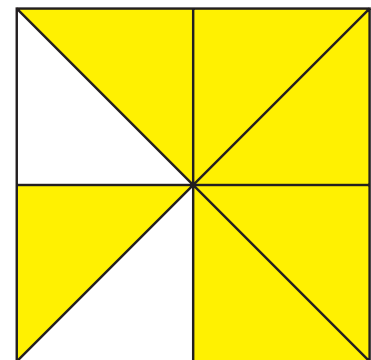
$$\frac{1}{4} \quad \text{ein Viertel}$$



$$\frac{1}{8} \quad \text{ein Achtel}$$




$$\frac{5}{8} \quad \text{fünf Achtel}$$




$$\frac{3}{4} \quad \text{drei Viertel}$$


- 2 Du siehst Gläser mit einer bestimmten Menge Wasser darin. Welcher Bruchteil fehlt noch auf einen Ganzen Liter (bis das Glas voll ist) ?




$$\frac{3}{8}$$




$$\frac{3}{5}$$



$$\frac{2}{7}$$



$$\frac{2}{3}$$



$$\frac{3}{6}$$