


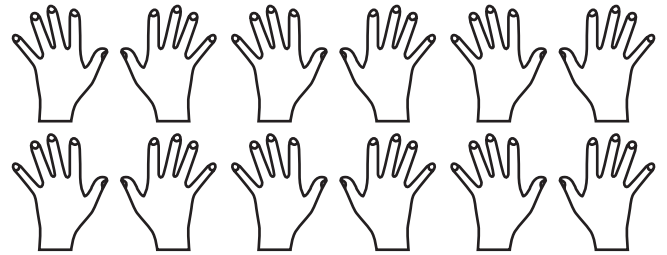
Das Einmaleins mit 21. Welche der beiden Familien hat mehr Mitglieder:

Familie Ritter

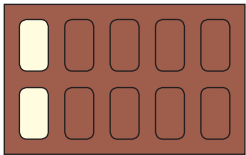


$$4 \times 2 = 8$$

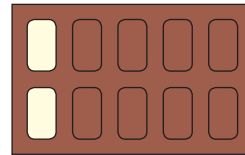
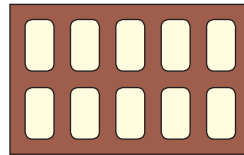
Familie Maier



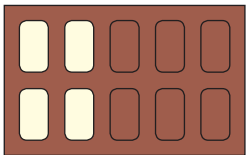
$$6 \times 2 = 12$$

2. Einmaleins mit 2:

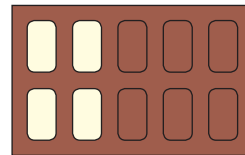
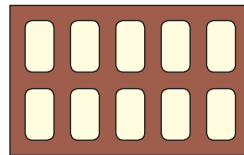
$$1 \times 2 = 2$$



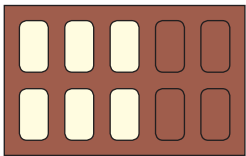
$$6 \times 2 = 12$$



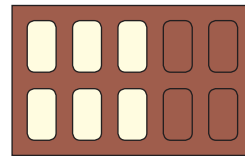
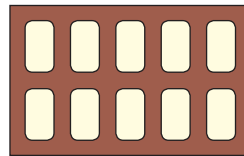
$$2 \times 2 = 4$$



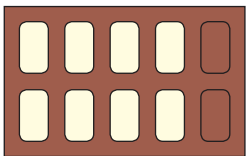
$$7 \times 2 = 14$$



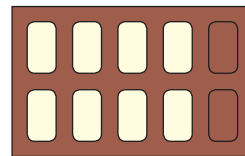
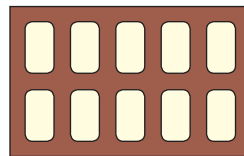
$$3 \times 2 = 6$$



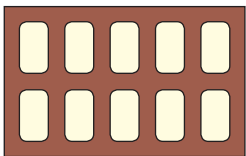
$$8 \times 2 = 16$$



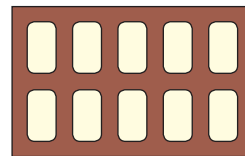
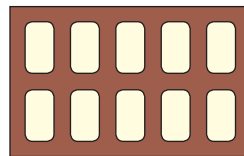
$$4 \times 2 = 8$$



$$9 \times 2 = 18$$



$$5 \times 2 = 10$$



$$10 \times 2 = 20$$

3. Für jede richtig gelöste Aufgabe bekommst du einen Punkt:

$$0 \times 2 = 0$$

$$3 \times 2 = 6$$

$$4 \times 2 = 8$$

$$7 \times 2 = 14$$

$$1 \times 2 = 2$$

$$8 \times 2 = 16$$

$$4 \times 2 = 8$$

$$8 \times 2 = 16$$

$$0 \times 2 = 0$$

$$6 \times 2 = 12$$

$$2 \times 2 = 4$$

$$9 \times 2 = 18$$

$$9 \times 2 = 18$$

$$5 \times 2 = 10$$

$$6 \times 2 = 12$$

