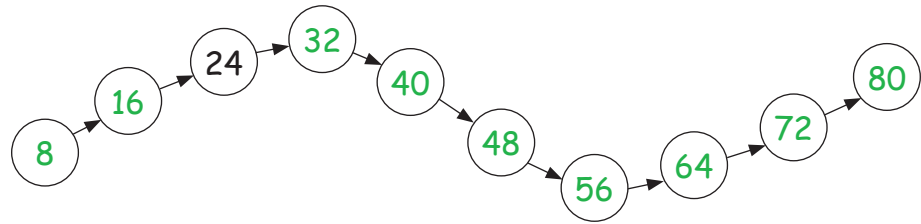
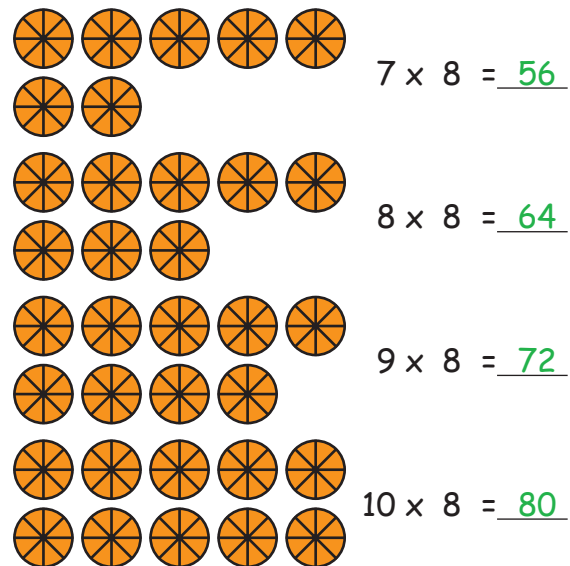
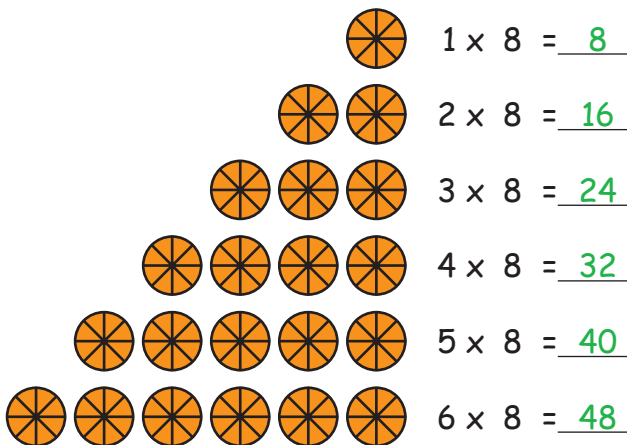


Das Einmaleins mit 81. Die Reihe fortführen:

72	48	24	80
40	8		64
56	16		32

2. Bilde das Einmaleins mit 8:3. Füge die fehlenden Zahlen ein:

$3 \times 8 = \underline{24}$	$\underline{7} \times 8 = 56$	$\underline{9} \times 8 = 72$	$4 \times 8 = \underline{32}$
$\underline{4} \times 8 = 32$	$6 \times \underline{8} = 48$	$8 \times 8 = \underline{64}$	$\underline{10} \times 8 = 80$
$2 \times \underline{8} = 16$	$\underline{1} \times 8 = 8$	$0 \times 8 = \underline{0}$	$\underline{2} \times 8 = 16$
$9 \times 8 = \underline{72}$	$5 \times 8 = \underline{40}$	$3 \times \underline{8} = 24$	$5 \times \underline{8} = 40$

4. Noch ein letztes Mal zur Überprüfung:

$2 \times 8 = \underline{16}$	$3 \times \underline{8} = \underline{24}$	$10 \times \underline{8} = \underline{80}$	$1 \times \underline{8} = \underline{8}$
$4 \times \underline{8} = \underline{32}$	$6 \times \underline{8} = \underline{48}$	$5 \times \underline{8} = \underline{40}$	$9 \times \underline{8} = \underline{72}$
$8 \times \underline{8} = \underline{64}$	$7 \times \underline{8} = \underline{56}$		