
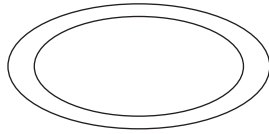


Die Zahl 0 kennenlernen


1. Schreibe hin, wieviel Stück du siehst:




1




0



3



2



4



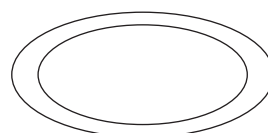
4



2



1

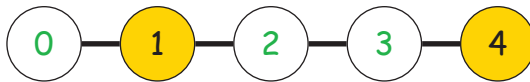
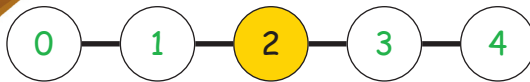
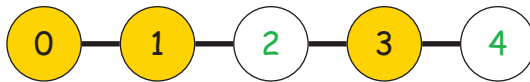
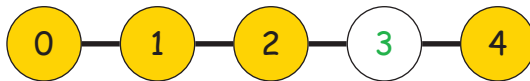


0



3

2. Füge die fehlenden Zahlen ein:



3. Zerlege die Zahl 4:

$1 + 3 = 4$

$4 = 3 + 1$

$2 + 2 = 4$

$4 = 2 + 2$

$3 + 1 = 4$

$4 = 0 + 4$

$4 + 0 = 4$

$4 = 1 + 3$

$0 + 4 = 4$

$4 = 4 + 0$