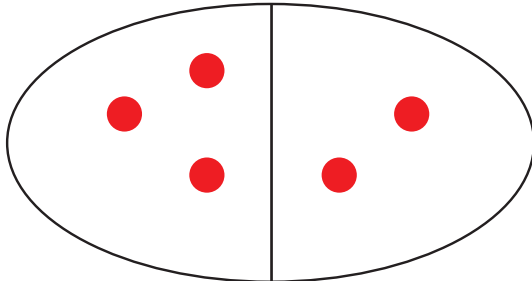
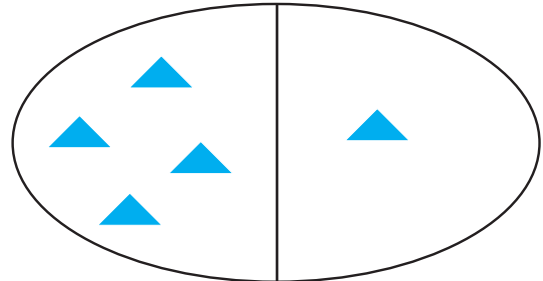


# Einfache Zählaufgaben

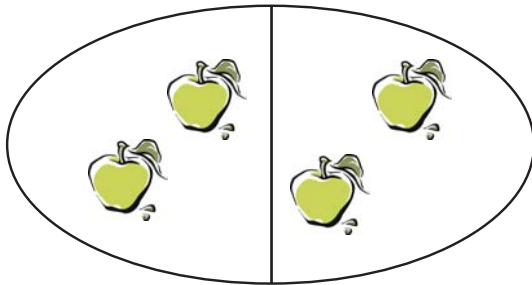
Zähle die Figuren und Formen in den Kästchen. Schreibe die Anzahl in das quadratische Kästchen darunter. In den Kreis schreibst du ein +.



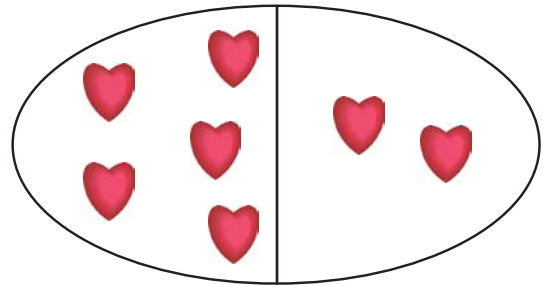
$$\boxed{3} + \boxed{2}$$




$$\boxed{4} + \boxed{1}$$



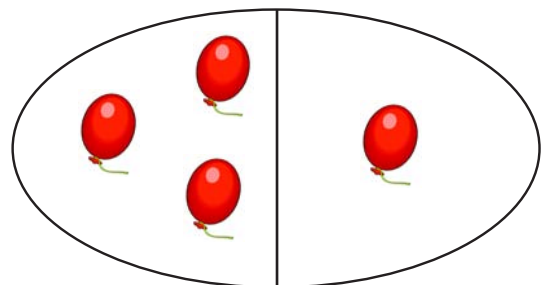
$$\boxed{2} + \boxed{2}$$




$$\boxed{5} + \boxed{2}$$



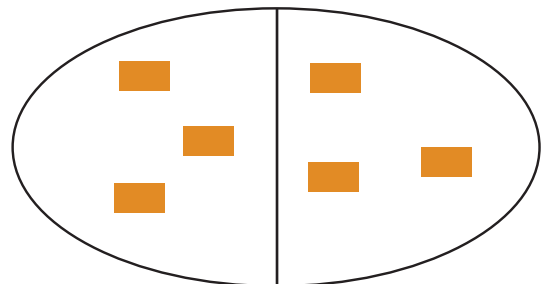
$$\boxed{2} + \boxed{1}$$



$$\boxed{3} + \boxed{1}$$



$$\boxed{3} + \boxed{4}$$



$$\boxed{3} + \boxed{3}$$