

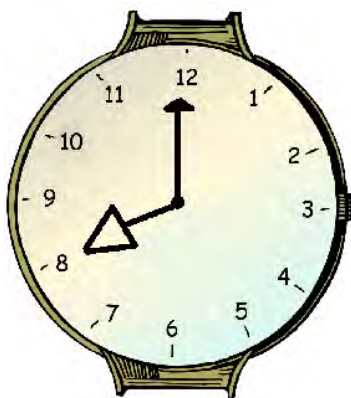
Explaining when it is...o'clock



The minute hand is on 12.
The hour hand is on 7.
It is 7 o'clock.


Colour the hour hand red and circle the correct time.

5 o'clock



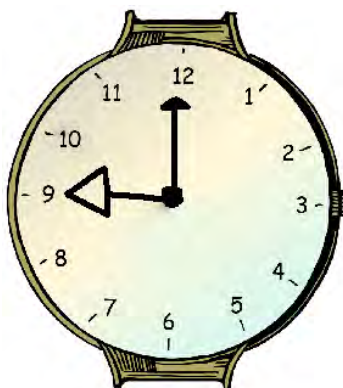
8 o'clock

2 o'clock




4 o'clock

9 o'clock




12 o'clock

1 o'clock




10 o'clock

3 o'clock



10 o'clock

11 o'clock



6 o'clock