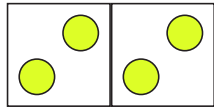
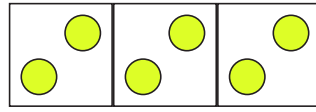


Malrechnen Zahlenraum 20



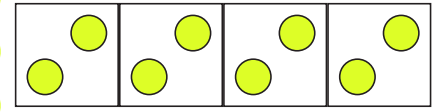
$$2 + 2 = \underline{4}$$

$$2 \times 2 = \underline{4}$$



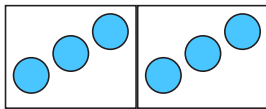
$$2 + 2 + 2 = \underline{6}$$

$$3 \times 2 = \underline{6}$$



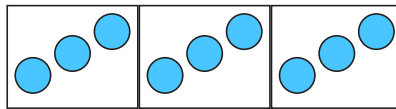
$$2 + 2 + 2 + 2 = \underline{8}$$

$$4 \times 2 = \underline{8}$$



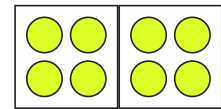
$$3 + 3 = \underline{6}$$

$$2 \times 3 = \underline{6}$$



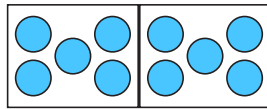
$$3 + 3 + 3 = \underline{9}$$

$$3 \times 3 = \underline{9}$$



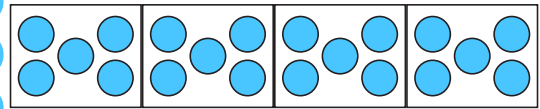
$$4 + 4 = \underline{8}$$

$$2 \times 4 = \underline{8}$$



$$5 + 5 = \underline{10}$$


$$2 \times 5 = \underline{10}$$



$$5 + 5 + 5 + 5 = \underline{20}$$

$$4 \times 5 = \underline{20}$$

Löse die Rechenaufgaben!



$$1 + 1 = \underline{2}$$

$$2 \times 1 = \underline{2}$$

$$2 + 2 = \underline{4}$$

$$2 \times 2 = \underline{4}$$

$$3 + 3 = \underline{6}$$

$$2 \times 3 = \underline{6}$$

$$4 + 4 = \underline{8}$$

$$2 \times 4 = \underline{8}$$

$$5 + 5 = \underline{10}$$

$$2 \times 5 = \underline{10}$$