


# Plus rechnen bis 9




Löse die Aufgaben und male die fehlenden Kästchen aus!



$$3 + 4 = 7$$




$$2 + 3 = 5$$




$$1 + 3 = 4$$




$$5 + 3 = 8$$



$$2 + 6 = 8$$




$$7 + 2 = 9$$




$$8 + 1 = 9$$



$$4 + 2 = 6$$



$$3 + 6 = 9$$



$$1 + 5 = 6$$