

























Übungen bis 7

Übungen bis 7








Übungen bis 7

Vervollständige die Zeilen:

Schreibe die Anzahl in die Kästchen:



						
2	1	7	3	6	5	4

Rechne:

- $6 + 1 = \underline{7}$
- $5 + 2 = \underline{7}$
- $3 + 4 = \underline{7}$
- $0 + 7 = \underline{7}$
- $1 + 6 = \underline{7}$
- $2 + 5 = \underline{7}$
- $4 + 3 = \underline{7}$
- $7 + 0 = \underline{7}$



- $7 - 0 = \underline{7}$
- $7 - 1 = \underline{6}$
- $7 - 2 = \underline{5}$
- $7 - 3 = \underline{4}$
- $7 - 4 = \underline{3}$
- $7 - 5 = \underline{2}$
- $7 - 6 = \underline{1}$
- $7 - 7 = \underline{0}$