

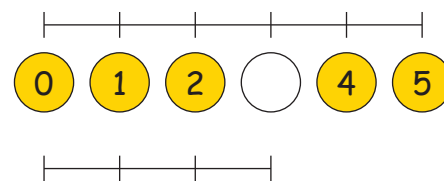
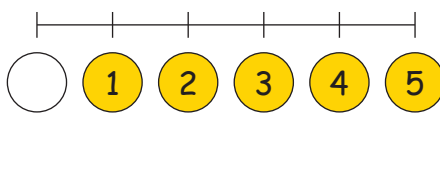
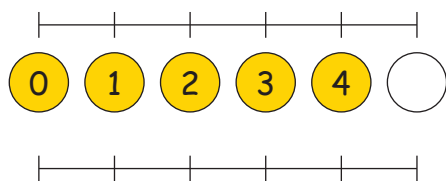
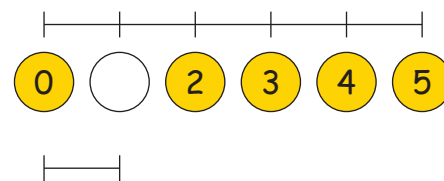
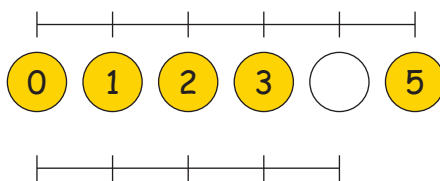
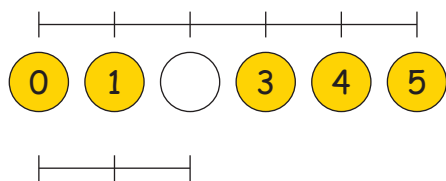
Zahlenstrahl bis 5

1. Die Zahlen bis 5:



2. Schreibe die fehlenden Zahlen hin:

Nimm dein Lineal zur Hilfe.



3. Trage die Zahlennachbarn ein:

	2	
--	---	--

	1	
--	---	--

		5
--	--	---

1		
---	--	--

	4	
--	---	--

	3	
--	---	--

0		
---	--	--

		4
--	--	---

4. Löse folgende Rechnungen:

1	+	3	=	
---	---	---	---	--

2	+		=	3
---	---	--	---	---

	+		=	1
--	---	--	---	---

3	+	2	=	
---	---	---	---	--

1	+		=	4
---	---	--	---	---

	+		=	2
--	---	--	---	---

5	+	0	=	
---	---	---	---	--

3	+		=	5
---	---	--	---	---

	+		=	3
--	---	--	---	---

1	+	1	=	
---	---	---	---	--

4	+		=	5
---	---	--	---	---

	+		=	4
--	---	--	---	---

2	+	1	=	
---	---	---	---	--

0	+		=	2
---	---	--	---	---

	+		=	5
--	---	--	---	---